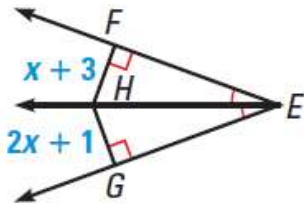
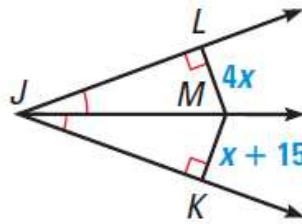


Homework on triangle bisectors (perpendicular and angle bisectors)

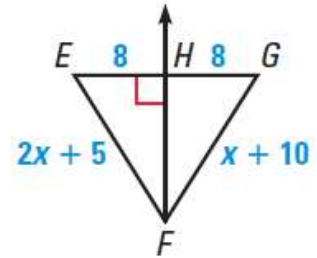
1. Find FH .



2. Find MK .

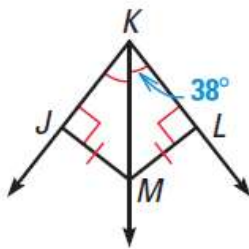


3. Find EF .

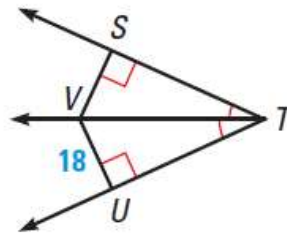


Using Bisectors Use the diagram to find the indicated measure(s).

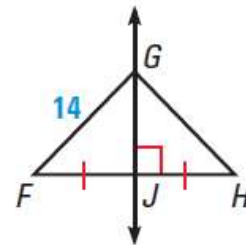
14. Find $m\angle JKM$.



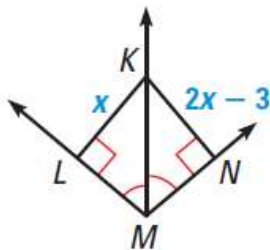
15. Find SV .



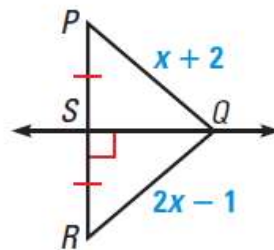
16. Find HG .



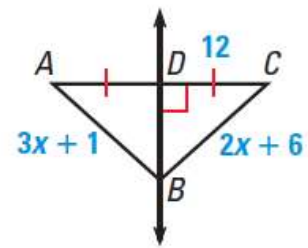
17. Find LK .



18. Find PQ .

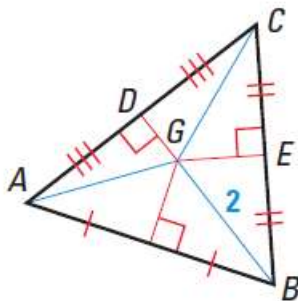


19. Find AD and BC .

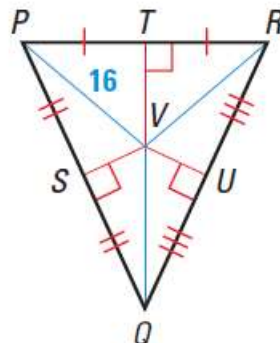


Using Perpendicular Bisectors Use the information in the diagram.

23. Find CG and AG .



24. Find VR and VQ .



25. Name all congruent segments.

