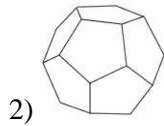
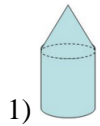


Name: _____ Date: _____ Period: _____

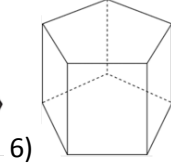
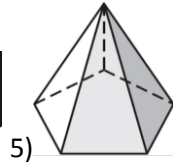
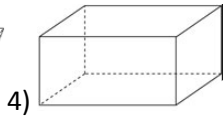
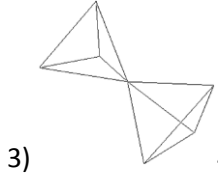
Focus on Geometry Unit 11 practice quiz

Show your work and write your answer in the box provided to the right

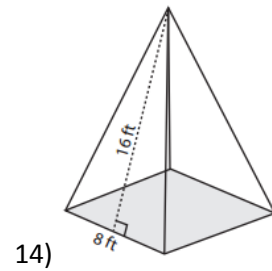
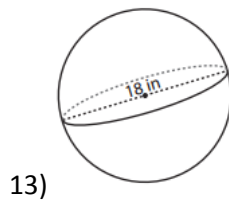
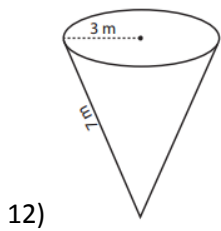
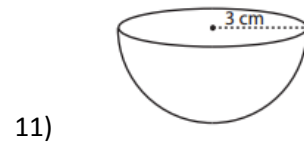
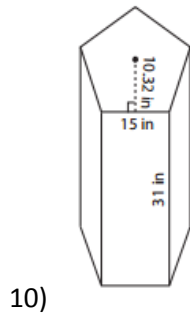
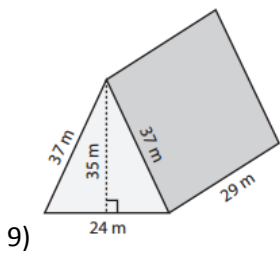
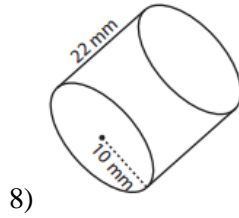
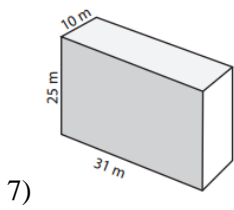
Indicate whether each solid below is a polyhedron or not.



Indicate the number of faces in the solids below.



Find the surface area in the following solids.



1) _____
 2) _____
 3) _____
 4) _____
 5) _____
 6) _____
 7) _____
 8) _____
 9) _____
 10) _____
 11) _____
 12) _____
 13) _____
 14) _____
 EC) _____

Extra credit: What solid does this net produce?

